

請於答案卷上作答，於試題卷上作答者，不予計分。

【題目共 4 題】

1. Consider a damped spring-mass system with an actuator as shown in Fig. 1(a). For a position-regulation system, which attempts to maintain the position of the block in one fixed place regardless of disturbances. (a) Please derived the closed-loop dynamics. (10%) (b)if the parameters of the damped spring-mass system are $m=1$, $b=1$ and $k=1$, find the gains K_p and K_v for a position-regulation control law the results in the system's being critically damped with a closed-loop stiffness of 16.0. (15%)

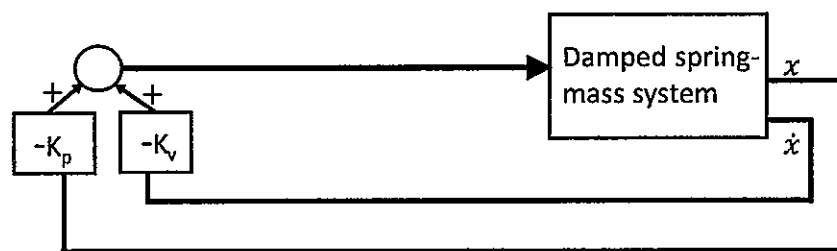
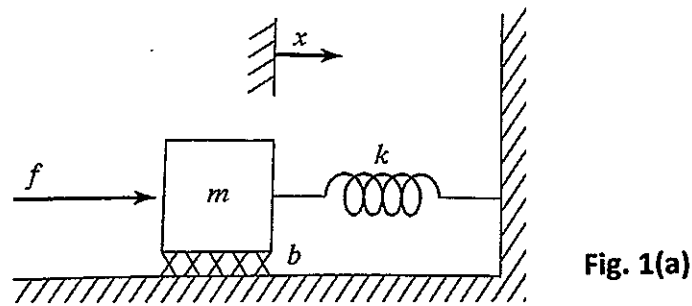


Fig. 1(b)

2. Consider a feedback control system shown in Fig. 2(a). The root loci of the feedback control system are shown in Fig. 2(b). (a) Find the parameters a , b , c , and d indicated in the forward-path transfer function of Fig. 2(a) (10%). (b) Find the gain K that the root loci of the system intersects the imaginary axis. (15%)

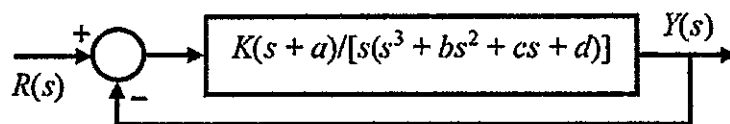


Fig. 2(a)

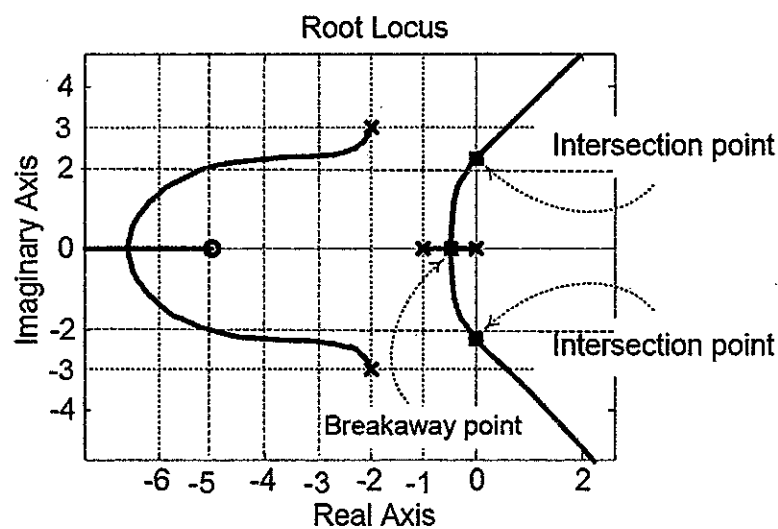


Fig. 2(b)

3. Consider a second-order position control system shown in Fig.3 with the transfer functions of the plant $G(s)=\frac{1}{s(s+1)}$ and $D(s)=$

$$K \frac{s+a}{s+b}$$

見背面

題號： 244
科目： 自動控制
節次： 2

國立臺灣大學 114 學年度碩士班招生考試試題

題號：244
共 2 頁之第 2 頁

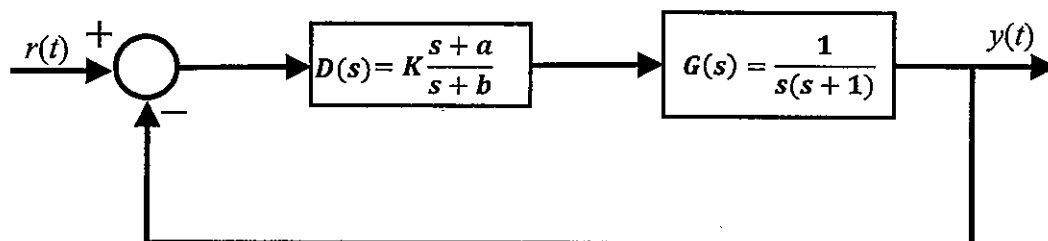


Fig. 3

- (a) Please calculate the steady state error for a unit-ramp input $r(t)$ if $K=10$ (10%)
(b) Please draw the Bode plot of $G(s)$ and find the phase margin of $G(s)$ (10%)
(c) Please design a lead compensator $D(s)$ so that the phase margin is larger than 45° (20%)
4. Consider a plant is described as $\frac{d}{dt} \begin{bmatrix} x_1 \\ x_2 \end{bmatrix} = \begin{bmatrix} 1 & -1 \end{bmatrix} u$, please design a state feedback so that the poles of the closed loop system are located at -20 and -10. (10%)

試題隨卷繳回