

1. Suppose 75% of all companies are classified as small companies and the rest as large companies. Suppose future, 80% of large companies provide training to employees, but only 18% of small companies provide training. A company is randomly selected without knowing if it is a large or small company; however, it is determined that the company provide training to employees. What are the probabilities that the company is a large company or a small company? Based on your analysis, what is the overall percentage of companies that offer training? (15%)
2. Suppose a hypothesis states that the population mean is greater than 175. If a random sample of 100 items is taken to test this hypothesis, what is the value of  $\beta$  (the probability of a Type II error) if the population standard deviation is 35 and the alternative mean is 185? Use  $\alpha=0.05$ . (15%)
3. Various types of retail outlets sell toys during the holiday season. Among them are specialty toy stores, large discount toy stores, and other retailers that carry toys as only one part of their stock of goods. Is there any difference in the dollar amount of a customer purchase between a large discount toy store and specialty toy store if they carry relatively comparable types of toys? Suppose in December a random sample of 20 sales slips is selected from a large discount toy outlet and a random sample of 15 sales slips is selected from a specialty toy store. The data gathered from these samples follow. Use  $\alpha=0.01$  to determine whether there is a difference in the average dollar amount of purchases at these stores. Assume that the populations of dollar amount of purchases at these two stores are normally distributed. You should state hypotheses or assumptions correctly first.(20%)

Large Discount Toy Store	Specialty Toy Store
$\bar{x}_D = \$47.20$	$\bar{x}_S = \$27.40$
$s_D = \$12.45$	$s_S = \$9.82$

見背面

4. (15%) Consider the data on the job satisfaction of state employees in California and New York given in Table 1. At the 2.5% significance level, test the null hypothesis that the distribution of state employees with regard to job satisfaction is similar for the two states.

Table 1

	California	New York
Very satisfied	60	75
Somewhat satisfied	100	125
Somewhat dissatisfied	184	140
Very dissatisfied	156	60
Column totals	500	400

5. (15%) In recent years, the debate over the U.S. economy has been constant. The electorate seems somewhat divided as to whether the economy is in a recovery or not.

Suppose a survey was undertaken to ascertain whether the perception of economic recovery differs according to political affiliation. People were selected for the survey from the Democratic Party, the Republican Party, and those classifying themselves as independents. A 25-point scale was developed in which respondents gave a score of 25 if they felt the economy was definitely in complete recovery, a zero if the economy was definitely not in a recovery, and some value in between for more uncertain responses. To control for differences in socioeconomic class, a blocking variable was maintained using five different socioeconomic categories. The data are given here in the form of a randomized block design. Use  $\alpha = .01$  to determine whether there is a significant difference in mean responses according to political affiliation.

Socioeconomic Class	Political Affiliation		
	Democrat	Republican	Independent
Upper	11	5	8
Upper middle	15	9	8
Middle	19	14	15
Lower middle	16	12	10
Lower	9	8	7

接次頁

6. (20%) Kiki uses least squares method and survey data with 23 observations to analyze the house price, where Y is the price of house;  $X_1$  is the size of house (square feet); and  $X_2$  is age of house. The estimated results are summarized in Table 2 and Table 3.

Table 2 Estimated Results

Variable	Coef	Stdev	t
constant	57.35	(a)	5.73
$X_1$	0.017718	(b)	5.63
$X_2$	-0.6663	(c)	-2.92
$S =$ (d)	$R^2 = 74.1\%$		$\bar{R}^2 = 71.5\%$

Table 3 Analysis of Variance

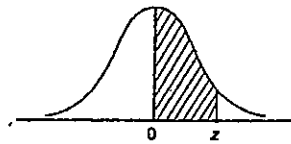
Source	SS	DF	MS	F
Regression	(e)	(g)	(i)	(k)
Error	(f)	(h)	(j)	
Total	11,050.7			

Please answer the following questions:

- (1) Please fill out all the blanks from (a) to (k).
- (2) What is the regression line?
- (3) What is the meaning of  $\beta_1$ ?
- (4) Let  $\beta_1$  be the coefficient corresponding to variable  $X_1$ . If the significant level is 0.05, please test the following hypothesis.  
 $H_0: \beta_1 = 1$   
 $H_1: \beta_1 < 1$
- (5) Let  $\beta_2$  is the coefficient corresponding to variable  $X_2$ , please estimate the confidence interval for  $\beta_2$  ( $1 - \alpha = 0.95$ ).

見背面

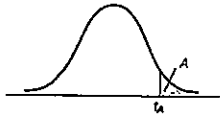
NORMAL CURVE AREAS



z	.00	.01	.02	.03	.04	.05	.06	.07	.08	.09
0.0	.0000	.0040	.0080	.0120	.0160	.0199	.0239	.0279	.0319	.0359
0.1	.0398	.0438	.0478	.0517	.0557	.0596	.0636	.0675	.0714	.0753
0.2	.0793	.0832	.0871	.0910	.0948	.0987	.1026	.1064	.1103	.1141
0.3	.1179	.1217	.1255	.1293	.1331	.1368	.1406	.1443	.1480	.1517
0.4	.1554	.1591	.1628	.1664	.1700	.1736	.1772	.1808	.1844	.1879
0.5	.1915	.1950	.1985	.2019	.2054	.2088	.2123	.2157	.2190	.2224
0.6	.2257	.2291	.2324	.2357	.2389	.2422	.2454	.2486	.2517	.2549
0.7	.2580	.2611	.2642	.2673	.2704	.2734	.2764	.2794	.2823	.2852
0.8	.2881	.2910	.2939	.2967	.2995	.3023	.3051	.3078	.3106	.3133
0.9	.3159	.3186	.3212	.3238	.3264	.3289	.3315	.3340	.3365	.3389
1.0	.3413	.3438	.3461	.3485	.3508	.3531	.3554	.3577	.3599	.3621
1.1	.3643	.3665	.3686	.3708	.3729	.3749	.3770	.3790	.3810	.3830
1.2	.3849	.3869	.3888	.3907	.3925	.3944	.3962	.3980	.3997	.4015
1.3	.4032	.4049	.4066	.4082	.4099	.4115	.4131	.4147	.4162	.4177
1.4	.4192	.4207	.4222	.4236	.4251	.4265	.4279	.4292	.4306	.4319
1.5	.4332	.4345	.4357	.4370	.4382	.4394	.4406	.4418	.4429	.4441
1.6	.4452	.4463	.4474	.4484	.4495	.4505	.4515	.4525	.4535	.4545
1.7	.4554	.4564	.4573	.4582	.4591	.4599	.4608	.4616	.4625	.4633
1.8	.4641	.4649	.4656	.4664	.4671	.4678	.4686	.4693	.4699	.4706
1.9	.4713	.4719	.4726	.4732	.4738	.4744	.4750	.4756	.4761	.4767
2.0	.4772	.4778	.4783	.4788	.4793	.4798	.4803	.4808	.4812	.4817
2.1	.4821	.4826	.4830	.4834	.4838	.4842	.4846	.4850	.4854	.4857
2.2	.4861	.4864	.4868	.4871	.4875	.4878	.4881	.4884	.4887	.4890
2.3	.4893	.4896	.4898	.4901	.4904	.4906	.4909	.4911	.4913	.4916
2.4	.4918	.4920	.4922	.4925	.4927	.4929	.4931	.4932	.4934	.4936
2.5	.4938	.4940	.4941	.4943	.4945	.4946	.4948	.4949	.4951	.4952
2.6	.4953	.4955	.4956	.4957	.4959	.4960	.4961	.4962	.4963	.4964
2.7	.4965	.4966	.4967	.4968	.4969	.4970	.4971	.4972	.4973	.4974
2.8	.4974	.4975	.4976	.4977	.4977	.4978	.4979	.4979	.4980	.4981
2.9	.4981	.4982	.4982	.4983	.4984	.4984	.4985	.4985	.4986	.4986
3.0	.4987	.4987	.4987	.4988	.4988	.4989	.4989	.4989	.4990	.4990

接次頁

Critical Values of the Student  $t$  Distribution



Degrees of Freedom	$t_{.100}$	$t_{.050}$	$t_{.025}$	$t_{.010}$	$t_{.005}$
1	3.078	6.314	12.706	31.821	63.657
2	1.886	2.920	4.303	6.965	9.925
3	1.638	2.353	3.182	4.541	5.841
4	1.533	2.132	2.776	3.747	4.604
5	1.476	2.015	2.571	3.365	4.032
6	1.440	1.943	2.447	3.143	3.707
7	1.415	1.895	2.365	2.998	3.499
8	1.397	1.860	2.306	2.896	3.355
9	1.383	1.833	2.262	2.821	3.250
10	1.372	1.812	2.228	2.764	3.169
11	1.363	1.796	2.201	2.718	3.106
12	1.356	1.782	2.179	2.681	3.055
13	1.350	1.771	2.160	2.650	3.012
14	1.345	1.761	2.145	2.624	2.977
15	1.341	1.753	2.131	2.602	2.947
16	1.337	1.746	2.120	2.583	2.921
17	1.333	1.740	2.110	2.567	2.898
18	1.330	1.734	2.101	2.552	2.878
19	1.328	1.729	2.093	2.539	2.861
20	1.325	1.725	2.086	2.528	2.845
21	1.323	1.721	2.080	2.518	2.831
22	1.321	1.717	2.074	2.508	2.819
23	1.319	1.714	2.069	2.500	2.807
24	1.318	1.711	2.064	2.492	2.797
25	1.316	1.708	2.060	2.485	2.787
26	1.315	1.706	2.056	2.479	2.779
27	1.314	1.703	2.052	2.473	2.771
28	1.313	1.701	2.048	2.467	2.763
29	1.311	1.699	2.045	2.462	2.756
30	1.310	1.697	2.042	2.457	2.750
35	1.306	1.690	2.030	2.438	2.724
40	1.303	1.684	2.021	2.423	2.704
45	1.301	1.679	2.014	2.412	2.690
50	1.299	1.676	2.009	2.403	2.678
55	1.297	1.673	2.004	2.396	2.668
60	1.296	1.671	2.000	2.390	2.660
65	1.295	1.669	1.997	2.385	2.654
70	1.294	1.667	1.994	2.381	2.648
75	1.293	1.665	1.992	2.377	2.643
80	1.292	1.664	1.990	2.374	2.639
85	1.292	1.663	1.988	2.371	2.635
90	1.291	1.662	1.987	2.368	2.632
95	1.291	1.661	1.985	2.366	2.629
100	1.290	1.660	1.984	2.364	2.626
110	1.289	1.659	1.982	2.361	2.621
120	1.289	1.658	1.980	2.358	2.617
130	1.288	1.657	1.978	2.355	2.614
140	1.288	1.656	1.977	2.353	2.611
150	1.287	1.655	1.976	2.351	2.609
160	1.287	1.654	1.975	2.350	2.607
170	1.287	1.654	1.974	2.348	2.605
180	1.286	1.653	1.973	2.347	2.603
190	1.286	1.653	1.973	2.346	2.602
200	1.286	1.653	1.972	2.345	2.601
$\infty$	1.282	1.645	1.960	2.326	2.576

見背面

Critical Values of the F-Distribution:  $\alpha = .05$



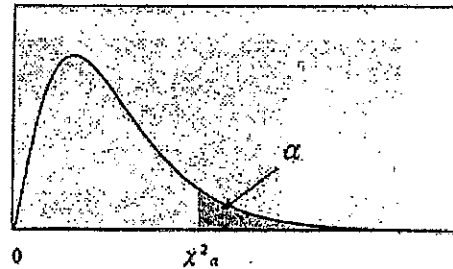
DENOMINATOR DEGREES OF FREEDOM	NUMERATOR DEGREES OF FREEDOM																			
	1	2	3	4	5	6	7	8	9	10	11	12	13	14	15	16	17	18	19	20
1	161	199	216	225	230	234	237	239	241	242	243	244	245	245	246	246	247	247	248	248
2	18.5	19.0	19.2	19.3	19.3	19.3	19.4	19.4	19.4	19.4	19.4	19.4	19.4	19.4	19.4	19.4	19.4	19.4	19.4	19.4
3	10.1	9.55	9.28	9.12	9.01	8.94	8.89	8.85	8.81	8.79	8.76	8.74	8.73	8.71	8.70	8.69	8.68	8.67	8.67	8.66
4	7.71	6.94	6.58	6.39	6.26	6.16	6.09	6.04	6.00	5.96	5.94	5.91	5.89	5.87	5.86	5.84	5.83	5.82	5.81	5.80
5	6.61	5.79	5.41	5.19	5.05	4.95	4.88	4.82	4.77	4.74	4.70	4.68	4.66	4.64	4.62	4.60	4.59	4.58	4.57	4.56
6	5.99	5.14	4.76	4.53	4.39	4.28	4.21	4.15	4.10	4.06	4.03	4.00	3.98	3.96	3.94	3.92	3.91	3.90	3.88	3.87
7	5.59	4.74	4.35	4.12	3.97	3.87	3.79	3.73	3.68	3.64	3.60	3.57	3.55	3.53	3.51	3.49	3.48	3.47	3.46	3.44
8	5.32	4.46	4.07	3.84	3.69	3.59	3.50	3.44	3.39	3.35	3.31	3.28	3.26	3.24	3.22	3.20	3.19	3.17	3.16	3.15
9	5.12	4.26	3.86	3.63	3.48	3.37	3.29	3.23	3.18	3.14	3.10	3.07	3.05	3.03	3.01	2.99	2.97	2.96	2.95	2.94
10	4.96	4.10	3.71	3.48	3.33	3.22	3.14	3.07	3.02	2.98	2.94	2.91	2.89	2.86	2.85	2.83	2.81	2.80	2.79	2.77
11	4.84	3.98	3.59	3.36	3.20	3.09	3.01	2.95	2.90	2.85	2.82	2.79	2.76	2.74	2.72	2.70	2.69	2.67	2.66	2.65
12	4.75	3.89	3.49	3.26	3.10	2.99	2.91	2.85	2.80	2.75	2.72	2.69	2.66	2.64	2.62	2.60	2.58	2.57	2.56	2.54
13	4.67	3.81	3.41	3.18	3.02	2.91	2.83	2.77	2.71	2.67	2.63	2.60	2.57	2.54	2.51	2.50	2.48	2.47	2.46	2.44
14	4.60	3.74	3.34	3.11	2.95	2.84	2.76	2.70	2.65	2.60	2.57	2.54	2.51	2.48	2.44	2.44	2.43	2.41	2.40	2.39
15	4.54	3.68	3.28	3.05	2.89	2.78	2.71	2.64	2.59	2.54	2.51	2.48	2.45	2.42	2.40	2.38	2.37	2.35	2.34	2.33
16	4.49	3.63	3.23	3.00	2.84	2.73	2.66	2.59	2.54	2.49	2.46	2.42	2.40	2.37	2.35	2.33	2.32	2.30	2.29	2.28
17	4.45	3.59	3.19	2.96	2.80	2.69	2.62	2.55	2.50	2.45	2.42	2.39	2.36	2.33	2.31	2.29	2.27	2.26	2.24	2.23
18	4.41	3.55	3.15	2.92	2.76	2.65	2.58	2.51	2.46	2.41	2.37	2.34	2.31	2.28	2.26	2.24	2.22	2.20	2.19	2.18
19	4.38	3.52	3.12	2.89	2.73	2.62	2.55	2.48	2.43	2.38	2.34	2.31	2.28	2.25	2.22	2.20	2.18	2.17	2.15	2.14
20	4.35	3.49	3.10	2.87	2.71	2.60	2.53	2.46	2.41	2.36	2.32	2.29	2.26	2.22	2.20	2.18	2.17	2.15	2.14	2.12
22	4.30	3.44	3.05	2.82	2.66	2.55	2.48	2.40	2.34	2.30	2.26	2.23	2.20	2.17	2.15	2.13	2.11	2.10	2.08	2.07
24	4.26	3.40	3.01	2.78	2.62	2.51	2.42	2.36	2.30	2.25	2.22	2.18	2.15	2.12	2.09	2.07	2.05	2.02	2.00	1.99
26	4.23	3.37	2.98	2.74	2.59	2.47	2.39	2.32	2.27	2.22	2.18	2.15	2.12	2.09	2.06	2.04	2.02	2.00	1.99	1.98
28	4.20	3.34	2.95	2.71	2.56	2.44	2.36	2.29	2.24	2.19	2.15	2.12	2.09	2.06	2.04	2.01	1.99	1.98	1.97	1.96
30	4.17	3.32	2.92	2.69	2.53	2.42	2.34	2.27	2.21	2.16	2.12	2.09	2.06	2.03	2.01	1.99	1.98	1.97	1.96	1.95
35	4.12	3.27	2.87	2.64	2.48	2.37	2.29	2.22	2.16	2.11	2.07	2.04	2.01	1.98	1.96	1.94	1.92	1.91	1.89	1.88
40	4.08	3.23	2.84	2.61	2.45	2.34	2.26	2.19	2.13	2.08	2.04	2.00	1.97	1.94	1.92	1.90	1.89	1.87	1.85	1.84
45	4.06	3.20	2.81	2.58	2.42	2.31	2.22	2.15	2.10	2.05	2.01	1.97	1.94	1.92	1.89	1.87	1.85	1.84	1.82	1.81
50	4.03	3.18	2.79	2.56	2.40	2.29	2.20	2.13	2.07	2.03	1.99	1.95	1.92	1.89	1.87	1.85	1.83	1.81	1.80	1.78
60	4.00	3.15	2.76	2.53	2.37	2.25	2.17	2.10	2.04	1.99	1.95	1.92	1.89	1.86	1.84	1.82	1.80	1.78	1.76	1.75
70	3.98	3.13	2.74	2.50	2.35	2.23	2.14	2.07	2.02	1.97	1.93	1.89	1.86	1.84	1.82	1.79	1.77	1.75	1.74	1.72
80	3.96	3.11	2.72	2.48	2.33	2.21	2.12	2.05	1.99	1.95	1.91	1.88	1.84	1.82	1.79	1.77	1.75	1.73	1.72	1.70
90	3.95	3.10	2.71	2.47	2.32	2.20	2.11	2.04	1.98	1.94	1.90	1.86	1.84	1.81	1.79	1.77	1.75	1.73	1.71	1.69
100	3.94	3.09	2.70	2.46	2.31	2.19	2.10	2.03	1.97	1.93	1.89	1.85	1.82	1.80	1.78	1.76	1.74	1.72	1.70	1.68
120	3.92	3.07	2.68	2.45	2.29	2.18	2.09	2.02	1.96	1.92	1.88	1.84	1.81	1.78	1.76	1.74	1.72	1.70	1.68	1.66
140	3.91	3.06	2.67	2.44	2.28	2.17	2.08	2.01	1.95	1.91	1.86	1.83	1.80	1.77	1.75	1.73	1.71	1.69	1.67	1.65
160	3.90	3.05	2.66	2.43	2.27	2.16	2.07	2.00	1.94	1.89	1.85	1.81	1.77	1.75	1.73	1.71	1.69	1.67	1.65	1.64
180	3.89	3.05	2.65	2.42	2.26	2.14	2.05	1.98	1.92	1.87	1.83	1.79	1.75	1.72	1.70	1.68	1.66	1.64	1.62	1.61
200	3.89	3.04	2.65	2.42	2.26	2.14	2.05	1.98	1.92	1.87	1.83	1.79	1.75	1.72	1.70	1.68	1.66	1.64	1.62	1.60
250	3.88	3.03	2.64	2.41	2.25	2.13	2.04	1.97	1.91	1.86	1.82	1.78	1.74	1.71	1.69	1.67	1.65	1.63	1.61	1.59
300	3.88	3.03	2.64	2.41	2.25	2.13	2.04	1.97	1.91	1.86	1.82	1.78	1.74	1.71	1.69	1.67	1.65	1.63	1.61	1.59

接次頁



卡方分配臨界值表

$$P(\chi^2 > \chi^2_\alpha) = \alpha$$




d.f.	$\chi^2_{0.995}$	$\chi^2_{0.990}$	$\chi^2_{0.975}$	$\chi^2_{0.950}$	$\chi^2_{0.900}$
1	0.0000393	0.0001571	0.0009821	0.0039322	0.0157907
2	0.0100247	0.0201004	0.0506357	0.1025862	0.2107208
3	0.0717235	0.1148316	0.2157949	0.3518460	0.5843755
4	0.206984	0.297107	0.484419	0.710724	1.063624
5	0.411751	0.554297	0.831209	1.145477	1.610309
6	0.675733	0.872083	1.237342	1.635380	2.204130
7	0.989251	1.239032	1.689864	2.167349	2.833105
8	1.344403	1.646506	2.179725	2.732633	3.489537
9	1.734911	2.087889	2.700389	3.325115	4.168156
10	2.155845	2.558199	3.246963	3.940295	4.865178
11	2.603202	3.053496	3.815742	4.574809	5.577788
12	3.073785	3.570551	4.403778	5.226028	6.303796
13	3.565042	4.106900	5.008738	5.891861	7.041500
14	4.074659	4.660415	5.628724	6.570632	7.789538
15	4.600874	5.229356	6.262123	7.260935	8.546753
16	5.142164	5.812197	6.907664	7.961639	9.312235
17	5.697274	6.407742	7.564179	8.671754	10.0852
18	6.264766	7.014903	8.230737	9.390448	10.8649
19	6.843923	7.632698	8.906514	10.1170	11.6509
20	7.433811	8.260368	9.590772	10.8508	12.4426
21	8.033602	8.897172	10.2829	11.5913	13.2396
22	8.642681	9.542494	10.9823	12.3380	14.0415
23	9.260383	10.1957	11.6885	13.0905	14.8480
24	9.886199	10.8563	12.4011	13.8484	15.6587
25	10.5196	11.5240	13.1197	14.6114	16.4734
26	11.1602	12.1982	13.8439	15.3792	17.2919
27	11.8077	12.8785	14.5734	16.1514	18.1139
28	12.4613	13.5647	15.3079	16.9279	18.9392
29	13.1211	14.2564	16.0471	17.7084	19.7677
30	13.7867	14.9535	16.7908	18.4927	20.5992
40	20.7066	22.1642	24.4331	26.5093	29.0505
50	27.9908	29.7067	32.3574	34.7642	37.6886
60	35.5344	37.4848	40.4817	43.1880	46.4589
80	51.1719	53.5400	57.1532	60.3915	64.2778
100	67.3275	70.0650	74.2219	77.9294	82.3581

見背面

卡方分配臨界值表  
(續)

$$P(\chi^2 > \chi^2_\alpha) = \alpha$$



$\chi^2_{0.100}$	$\chi^2_{0.050}$	$\chi^2_{0.025}$	$\chi^2_{0.010}$	$\chi^2_{0.005}$	d.f.
2.705541	3.841455	5.023903	6.634891	7.879400	1
4.605176	5.991476	7.377779	9.210351	10.5965	2
6.251394	7.814725	9.348404	11.3449	12.8381	3
7.779434	9.487728	11.1433	13.2767	14.8602	4
9.236349	11.0705	12.8325	15.0863	16.7496	5
10.6446	12.5916	14.4494	16.8119	18.5475	6
12.0170	14.0671	16.0128	18.4753	20.2777	7
13.3616	15.5073	17.5345	20.0902	21.9549	8
14.6837	16.9190	19.0228	21.6660	23.5893	9
15.9872	18.3070	20.4832	23.2093	25.1881	10
17.2750	19.6752	21.9200	24.7250	26.7569	11
18.5493	21.0261	23.3367	26.2170	28.2997	12
19.8119	22.3620	24.7356	27.6882	29.8193	13
21.0641	23.6848	26.1189	29.1412	31.3194	14
22.3071	24.9958	27.4884	30.5780	32.8015	15
23.5418	26.2962	28.8453	31.9999	34.2671	16
24.7690	27.5871	30.1910	33.4087	35.7184	17
25.9894	28.8693	31.5264	34.8052	37.1564	18
27.2036	30.1435	32.8523	36.1908	38.5821	19
28.4120	31.4104	34.1696	37.5663	39.9969	20
29.6151	32.6706	35.4789	38.9322	41.4009	21
30.8133	33.9245	36.7807	40.2894	42.7957	22
32.0069	35.1725	38.0756	41.6383	44.1814	23
33.1962	36.4150	39.3641	42.9798	45.5584	24
34.3816	37.6525	40.6465	44.3140	46.9280	25
35.5632	38.8851	41.9231	45.6416	48.2898	26
36.7412	40.1133	43.1945	46.9628	49.6450	27
37.9159	41.3372	44.4608	48.2782	50.9936	28
39.0875	42.5569	45.7223	49.5878	52.3355	29
40.2560	43.7730	46.9792	50.8922	53.6719	30
51.8050	55.7585	59.3417	63.6908	66.7660	40
63.1671	67.5048	71.4202	76.1538	79.4898	50
74.3970	79.0820	83.2977	88.3794	91.9518	60
96.5782	101.879	106.629	112.329	116.321	80
118.498	124.342	129.561	135.807	140.170	100

接次頁



848

THE F DISTRIBUTION TABLE



Area in the Right Tail under the F Distribution Curve = .01

I	Degrees of Freedom for the Numerator																		
	1	2	3	4	5	6	7	8	9	10	11	12	15	20	25	30	40	50	100
1	4052	5000	5403	5625	5764	5859	5928	5981	6022	6056	6083	6106	6157	6209	6240	6261	6287	6303	6334
2	98.50	99.00	99.17	99.25	99.30	99.33	99.36	99.37	99.39	99.40	99.41	99.42	99.43	99.45	99.46	99.47	99.47	99.48	99.49
3	34.12	30.82	29.46	28.71	28.24	27.91	27.67	27.49	27.35	27.23	27.13	27.05	26.87	26.69	26.58	26.50	26.41	26.35	26.24
4	21.20	18.00	16.69	15.98	15.52	15.21	14.98	14.80	14.66	14.55	14.45	14.37	14.20	14.02	13.91	13.84	13.75	13.69	13.58
5	16.26	13.27	12.06	11.39	10.97	10.67	10.46	10.29	10.16	10.05	9.96	9.89	9.72	9.55	9.45	9.38	9.29	9.24	9.13
6	13.75	10.92	9.78	9.15	8.75	8.47	8.26	8.10	7.98	7.87	7.79	7.72	7.56	7.40	7.30	7.23	7.14	7.09	6.99
7	12.25	9.55	8.45	7.85	7.46	7.19	6.99	6.84	6.72	6.62	6.54	6.47	6.31	6.16	6.06	5.99	5.91	5.86	5.75
8	11.26	8.65	7.59	7.01	6.63	6.37	6.18	6.03	5.91	5.81	5.73	5.67	5.52	5.36	5.26	5.20	5.12	5.07	4.96
9	10.56	8.02	6.99	6.42	6.06	5.80	5.61	5.47	5.35	5.26	5.18	5.11	4.96	4.81	4.71	4.65	4.57	4.52	4.41
10	10.04	7.56	6.55	5.99	5.64	5.39	5.20	5.06	4.94	4.85	4.77	4.71	4.56	4.41	4.31	4.25	4.17	4.12	4.01
11	9.65	7.21	6.22	5.67	5.32	5.07	4.89	4.74	4.63	4.54	4.46	4.40	4.25	4.10	4.01	3.94	3.86	3.81	3.71
12	9.33	6.93	5.95	5.41	5.06	4.82	4.64	4.50	4.39	4.30	4.22	4.16	4.01	3.86	3.76	3.70	3.62	3.57	3.47
13	9.07	6.70	5.74	5.21	4.86	4.62	4.44	4.30	4.19	4.10	4.02	3.96	3.82	3.66	3.57	3.51	3.43	3.38	3.27
14	8.86	6.51	5.56	5.04	4.69	4.46	4.28	4.14	4.03	3.94	3.86	3.80	3.66	3.51	3.41	3.35	3.27	3.22	3.11
15	8.68	6.36	5.42	4.89	4.56	4.32	4.14	4.00	3.89	3.80	3.73	3.67	3.52	3.37	3.28	3.21	3.13	3.08	2.98
16	8.53	6.23	5.29	4.77	4.44	4.20	4.03	3.89	3.78	3.69	3.62	3.55	3.41	3.26	3.16	3.10	3.02	2.97	2.86
17	8.40	6.11	5.18	4.67	4.34	4.10	3.93	3.79	3.68	3.59	3.52	3.46	3.31	3.16	3.07	3.00	2.92	2.87	2.76
18	8.29	6.01	5.09	4.58	4.25	4.01	3.84	3.71	3.60	3.51	3.43	3.37	3.23	3.08	2.98	2.92	2.84	2.78	2.68
19	8.18	5.93	5.01	4.50	4.17	3.94	3.77	3.63	3.52	3.43	3.36	3.30	3.15	3.00	2.91	2.84	2.76	2.71	2.60
20	8.10	5.85	4.94	4.43	4.10	3.87	3.70	3.56	3.46	3.37	3.29	3.23	3.09	2.94	2.84	2.78	2.69	2.64	2.54
21	8.02	5.78	4.87	4.37	4.04	3.81	3.64	3.51	3.40	3.31	3.24	3.17	3.03	2.88	2.79	2.72	2.64	2.58	2.48
22	7.95	5.72	4.82	4.31	3.99	3.76	3.59	3.45	3.35	3.26	3.18	3.12	2.98	2.83	2.73	2.67	2.58	2.53	2.42
23	7.88	5.66	4.76	4.26	3.94	3.71	3.54	3.41	3.30	3.21	3.14	3.07	2.93	2.78	2.69	2.62	2.54	2.48	2.37
24	7.82	5.61	4.72	4.22	3.90	3.67	3.50	3.36	3.26	3.17	3.09	3.03	2.89	2.74	2.64	2.58	2.49	2.44	2.33
25	7.77	5.57	4.68	4.18	3.85	3.63	3.46	3.32	3.22	3.13	3.06	2.99	2.85	2.70	2.60	2.54	2.45	2.40	2.29
30	7.56	5.39	4.51	4.02	3.70	3.47	3.30	3.17	3.07	2.98	2.91	2.84	2.70	2.55	2.45	2.39	2.30	2.25	2.13
40	7.31	5.18	4.31	3.83	3.51	3.29	3.12	2.99	2.89	2.80	2.73	2.66	2.52	2.37	2.27	2.20	2.11	2.06	1.94
50	7.17	5.06	4.20	3.72	3.41	3.19	3.02	2.89	2.78	2.70	2.63	2.56	2.42	2.27	2.17	2.10	2.01	1.95	1.82
100	6.90	4.82	3.98	3.51	3.21	2.99	2.82	2.69	2.59	2.50	2.43	2.37	2.22	2.07	1.97	1.89	1.80	1.74	1.60

Degrees of Freedom for the Denominator

試題隨卷繳回