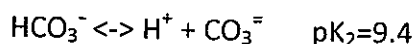
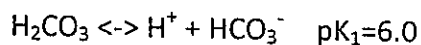
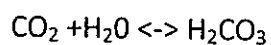


1. For a group of measurement: 10.2, 10.1 9.8, 10.5, 10.0, 10.0
 Give mean, median, variance, standard deviation, relative standard deviation. If the target value is 10, what is the relative error?(20%)

2. The followings are acid-basic indicators. Please fill in your answer. (20%)

Name	pH Range	pKa	Color change
Methyl orange	3.1-(?)	3.46	(?) - orange
Methyl red	4.4-6.2	(?)	red - (?)
Phenolphthalein	(?)-10	9.7	colorless-(?)
Bromothymol blue	6.2-7.6	(?)	(?)-blue
Phenol red	(?)-8.0	7.81	(?)-red

3. Carbon dioxide in atmosphere will dissolve in ocean, and further dissociate into different species:



Please draw a diagram to show the fractionation against pH. (i.e. %Conc. Vs pH).(10%)

If the total concentration of carbon dioxide system in seawater is 2 mM. Please estimate the concentration of the three species at pH 5.6, 7.7 and 9.8. (10%)

4. In chromatography, for a given column with a length L,

$$N=L/H$$

If N is the plate number, what is H? Give its full English name.(5%)

If W represents peak width, what is the meaning of the following equation? (5%)

$$H=(LW^2)/(16t_R^2)$$

The van Deemter equation can be described as:

$$H= A + B/u + Cu$$

Explain the above equation. (5%)

Differentiate this equation will give an optimal flow speed u, so u=? (5%)

5. In spectrophotometry, fill in your answer. (20%)

Transmittance	Absorbance
100%	?
?	0.0044
90%	0.046
?	0.301
10%	1.000
?	2.000
0.1%	?

A concentration that produces an absorbance of 0.0044, how do you define it?

試題隨卷繳回